

विशेषण

नीचे लिखे वाक्यों को उनकी संख्या/मात्रा बताने वाले विशेषण शब्दों से पूरा करें।

1. _____ लड़कियाँ हँसने लगीं।

2. वह _____ दिनों से बीमार है।

3. रावण के _____ सिर थे।

4. हमारी इमारत _____ मंजिल की है।

5. हर हाथ में _____ उंगलियाँ और
अंगूठा होता है।

पाँच

सारी

कई

दस

चार, एक



— अभ्यास —

दिए गए विशेषण शब्दों की सहायता से रिक्त स्थान भरिए और चोलिए—

(क) गुलाब फूल का रंग होता है।
(लाल/हरा)



(ख) मोर के पंख होते हैं।
(रंग-बिरंगे/काले)



(ग) घड़ी में सूइयाँ होती हैं।
(तीन/चार)



(घ) खाना मत खाओ।
(बासी/ताजा)



(ङ) तोंते की चोंच होती है।
(लाल/हरी)



(च) बकरी जानवर है।
(जंगली/पालतू)



(छ) आम का पेड़ होता है।
(बड़/छोटा)



Add the numbers

$$\begin{array}{r} 1) \\ + 51 \\ \hline 42 \\ \hline \end{array}$$

$$\begin{array}{r} 2) \\ + 37 \\ \hline 42 \\ \hline \end{array}$$

$$\begin{array}{r} 3) \\ + 42 \\ \hline 36 \\ \hline \end{array}$$

$$\begin{array}{r} 4) \\ + 52 \\ \hline 34 \\ \hline \end{array}$$

$$\begin{array}{r} 5) \\ + 33 \\ \hline 35 \\ \hline \end{array}$$

$$\begin{array}{r} 6) \\ + 27 \\ \hline 62 \\ \hline \end{array}$$

Multiplication

Fill in the boxes

a) $2 + 2 + 2 + 2$

$4 \times 2 = 8$

b) $4 + 4 + 4 + 4 + 4$

$5 \times 4 = 20$

c) $10 + 10 + 10$

$3 \times 10 = 30$

d) $6 + 6 + 6 + 6 + 6 + 6$


$6 \times 6 = 36$


e) $8 + 8$

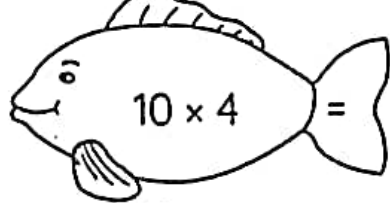
f) $9 + 9 + 9 + 9 + 9 + 9 + 9$

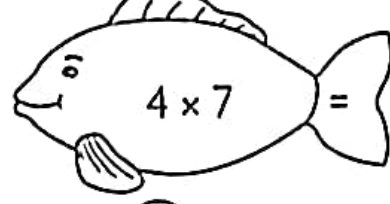
MULTIPLICATION USING TABLES

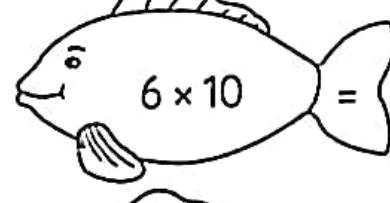
Fill in the circles using multiplication tables. One has been done for you.


(a)  $5 \times 3 =$ 15

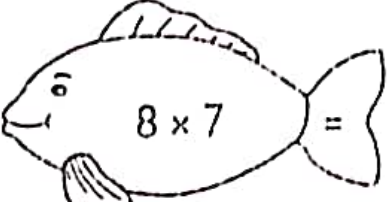
(c)  $3 \times 8 =$

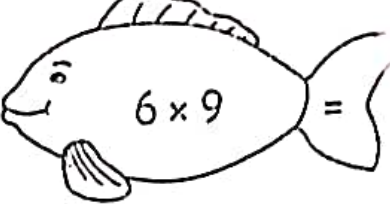
(e)  $10 \times 4 =$


(g)  $4 \times 7 =$


(i)  $6 \times 10 =$


(k)  $8 \times 9 =$

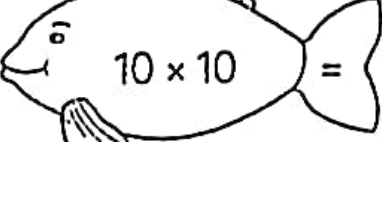
(b)  $8 \times 7 =$

(d)  $6 \times 9 =$

(f)  $7 \times 3 =$

(h)  $8 \times 8 =$

(j)  $9 \times 5 =$

(l)  $10 \times 10 =$

LITTLE ROSE ACADEMY HIGH SCHOOL

SUMMER ASSESSMENT

CLASS-2ND

SUBJECT -ENGLISH

CHAPTER-WE WANT THE MOON

OBSERVING THE SKY



Which objects can be seen at night, which during the day, and which at both times? Check off the correct boxes.

Day

Night

bright moon



sun



stars



rainbow



clouds

LITTLE ROSE ACADEMY HIGH SCHOOL

SUMMER ASSESSMENT

CLASS-2ND

SUBJECT -ENGLISH

CHAPTER-WE WANT THE MOON



We Want the Moon



Warm-Up

A. Answer these questions.

1. Have you seen the moon at night? _____
2. Is the moon of the same size on all nights? _____

B. Match the shapes of the moon with their names.

1.



2.



3.



a) half moon

b) full moon

c) no moon

C. Look at the moon tonight. Write its name and draw its shape.



Class-2nd

Chapter -Clothes

Subject -EVS

Unscrambled the words

1. T T O N C O

2. K L I S

3. R E R U B B

4. L O O C

5. M O R F I N U

Answers: 1. Cotton

2. Silk

3. Rubber

4. Cool

5. Uniform

Class- 2nd

Chapter- Clothes

Subject -EVS

2. Write the names of clothes in correct box according to the season in which we wear them.

(Shirt, Frock, Sweater, Gloves, Raincoat, Gumboots)

Summer season	Rainy season	Winter season
Shirt	Raincoat	Sweater
Frock	Gumboots	Gloves

LESSON-4 (FUN AND GAMES)

Answer the following answer

Q1 What are indoor games?

Ans Games which are played inside home are called Indoor games.

Q2 What are outdoor games?

Ans Games which are played in open area are called outdoor games.

Q3 Name three indoor games?

Ans Chess, carromboard, ludo

Q4 Name three outdoor games?

Ans Cricket, football, hockey

Q5 Why are games important for us ?

Ans Games are important for us as it help in the all round development of us.